


Mathématiques CE1 : La monnaie


Colorie les billets et pièces nécessaires pour atteindre la somme donnée :

63 €




A collection of banknotes and coins for 63 €. It includes six 10 Euro banknotes, three 5 Euro banknotes, three 2 Euro coins, and three 1 Euro coins.

37 €




A collection of banknotes and coins for 37 €. It includes six 10 Euro banknotes, three 5 Euro banknotes, three 2 Euro coins, and three 1 Euro coins.

56 €



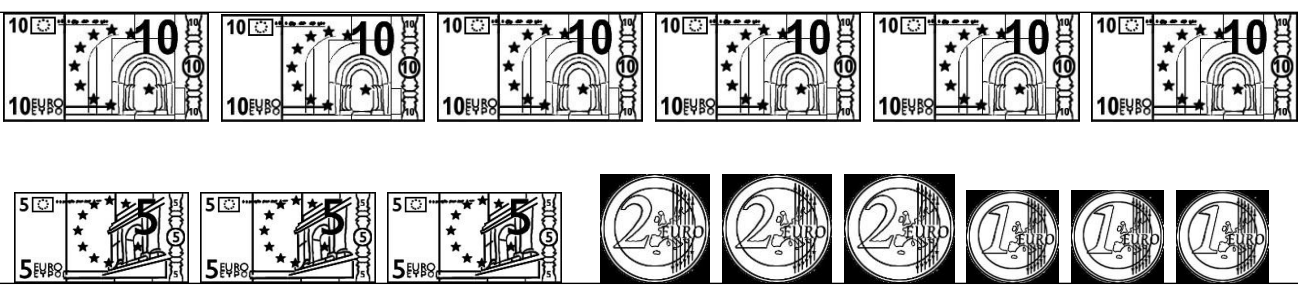
A collection of banknotes and coins for 56 €. It includes six 10 Euro banknotes, three 5 Euro banknotes, three 2 Euro coins, and three 1 Euro coins.

28 €



A collection of banknotes and coins for 28 €. It includes six 10 Euro banknotes, three 5 Euro banknotes, two 2 Euro coins, and three 1 Euro coins.

44 €



A collection of banknotes and coins for 44 €. It includes six 10 Euro banknotes, three 5 Euro banknotes, three 2 Euro coins, and three 1 Euro coins.

Ecris la somme qui se trouve sans chacun des cadres :

