

Maths - la monnaie 1

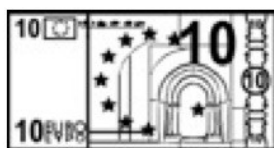
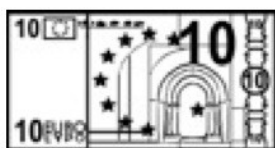
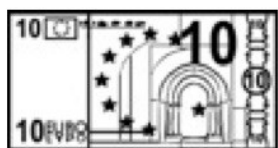
Calcule chaque somme.



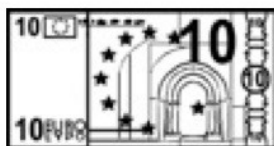
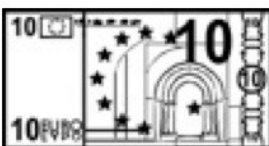
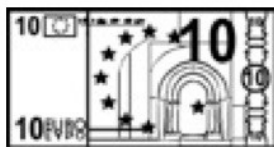
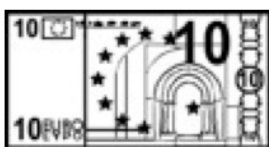
..... €



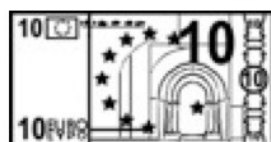
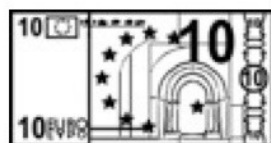
..... €



..... €



..... €



..... €

Dessine les pièces et les billets qu'il faudra donner au marchand. Tu dois réaliser la somme avec le moins de pièces et de billets possible.

13€



une trousse

27€



une robe

59€



un vélo