



La monnaie



La Doudou Classe CP

Combien y-a-t-il d' € dans chaque porte-monnaie ?



Les euros



La Domrod Classe CP

Voici la vitrine d'un magasin de jouets.




8€

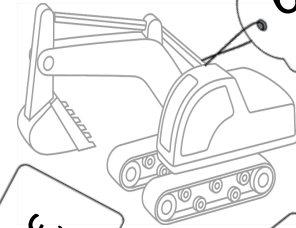


4€



20€



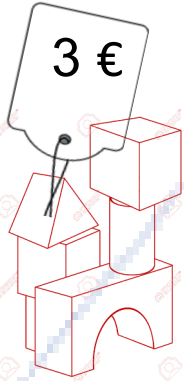
13€




6€




11€



3€



15€

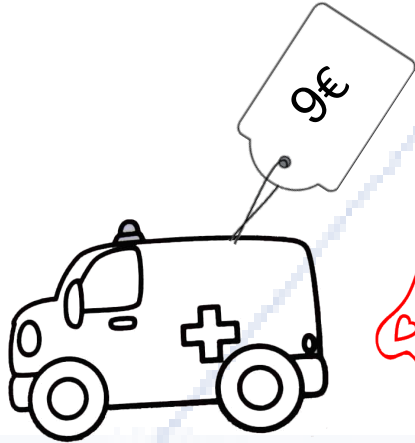


5€

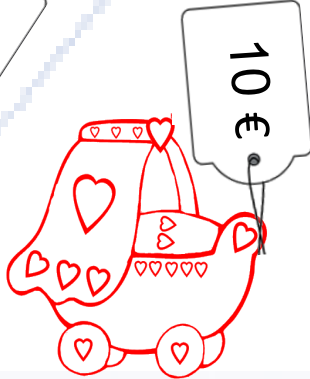


2€

14€



9€




10€



12€



18€



7€


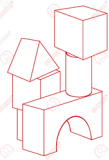


Les euros



La Douce Classe CP

Trouve le prix de chaque chariot.



.... + + =



.... + =



.... + + =




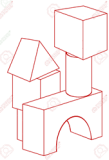
.... + + =



Les euros



La Douce Classe CP



22



23



$$4... + 3... + 15... = 22...$$

$$13... + 10... = 23...$$



23



25



$$11... + 7... + 5... = 23...$$

$$14... + 9... + 2... = 25...$$