

## Mathématiques

### Exercice 1 : calculs:

1  $3 \times 5 =$   11  $54 + 9 =$   21  $19 \times 10 =$

2  $5 \times 4 =$   12  $131 + 9 =$   22  $29 \times 10 =$

3  $6 \times 4 =$   13  $775 + 9 =$   23  $430 \times 10 =$

4  $8 \times 6 =$   14  $1999 + 9 =$   24  $501 \times 10 =$

5  $4 \times 7 =$   15  $77 - 9 =$   25  $2\,440 \times 10 =$

6  $2 \times$    $= 18$  16  $550 - 9 =$   26  $994 \times 100 =$

7  $5 \times 9 =$   17  $5400 - 99 =$   27  $1\,955 \times 100 =$

8  $7 \times 7 =$   18  $155 + 11 =$   28  $771 \times 100 =$

9  $4 \times$    $= 16$  19  $284 + 11 =$   29  $3\,003 \times 100 =$

10  $6 \times$    $= 36$  20  $4280 + 100 =$   30  $12\,005 \times 100 =$

### Exercice 2 :

Coche la bonne réponse :

	VRAI	FAUX
On peut encadrer le nombre 6 389 entre 6 300 et 6 400	<input type="checkbox"/>	<input type="checkbox"/>
On peut encadrer le nombre 15 857 entre 16 850 et 16 860	<input type="checkbox"/>	<input type="checkbox"/>
On peut encadrer le nombre 725 001 entre 730 000 et 740 000	<input type="checkbox"/>	<input type="checkbox"/>

### Exercice 3 :

Encadre les nombres à la dizaines près. Ex  $450 < 456 < 460$

$< 852 <$

$< 1\,472 <$

$< 7\,212 <$

$< 12\,802 <$

**Exercice 4 :**

Encadre les nombres à la centaine près. Ex :  $400 < 456 < 500$

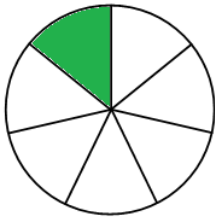
< 1 341 <

< 5 252 <

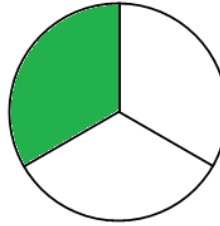
< 13 852 <

**Exercice 5 :**

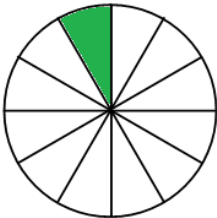
Pour chaque cercle, indique la fraction correspondante :



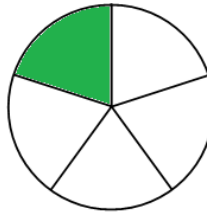
-----



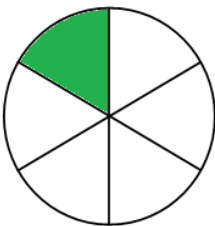
-----



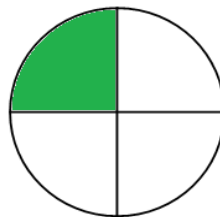
-----



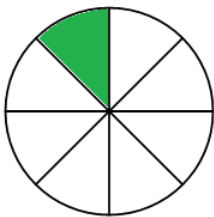
-----



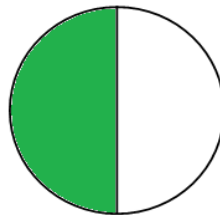
-----



-----



-----



-----